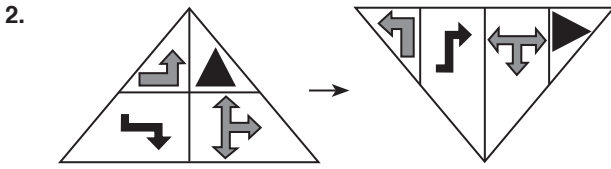


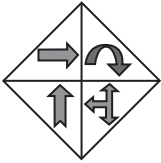
Sol sağ şekiller yer değiştirmiş

Cevap: C



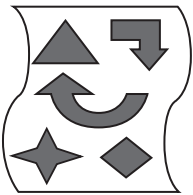
Cevap: E

3. Sola doğru döndürülüyor.

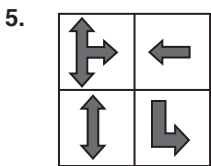


Cevap: A

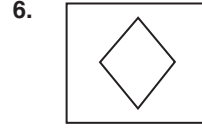
4. Simetri ayna karşısında



Cevap: D



Cevap: D

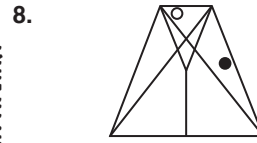


Cevap: C

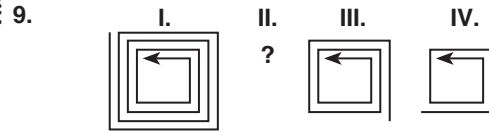
7. Üst üste konulmakta şekiller.



Cevap: C



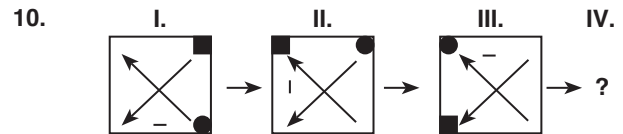
Cevap: B



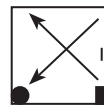
Üç çizgi silinmekte



Cevap: A

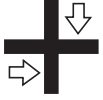


Kare ve daire saat yönünün tersinde bir adım köşelere – ise saat yönünde bir adım



Cevap: E

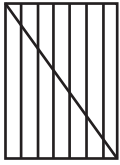
11.



Oklar saat yönünde dönmekte

Cevap: C

12.



Cevap: E

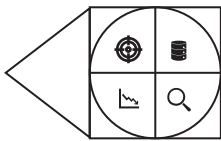
13.



● → Çapraz köşelerde hareket etmekte  
 ~ → Bir adım saat yönünde kenarlarda ilerlemekte

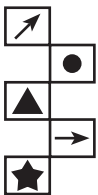
Cevap: C

14.



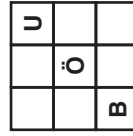
Cevap: A

15.



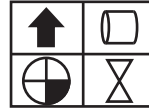
Cevap: A

16.




Cevap: B

17.



Cevap: E

18. Birinci kare sağa doğru bir adım  
 İkinci kare bir sağa sonra sol şeklinde  
 Üçüncü kare bir adım yukarı doğru



Cevap: C

19. Saat yönünün tersi bir adım



Cevap: A

20.



Cevap: C