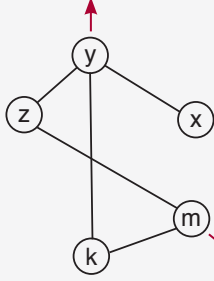


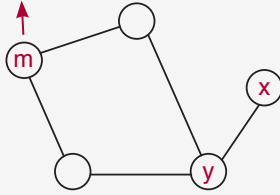
TEST - 1 ÇÖZÜMLER

1. x, z ve k ile bağlı

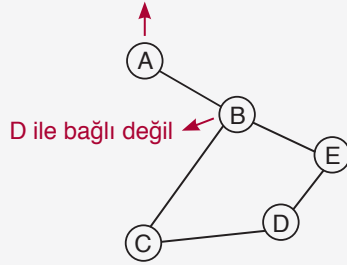


y ile bağlı değil

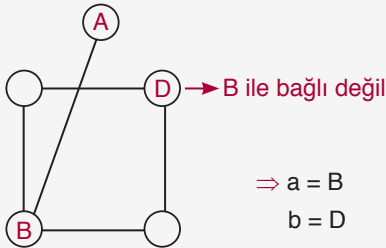
y ile bağlı değil


 $\Rightarrow a = m$
 $b = y$

2. Sadece B ile bağlı

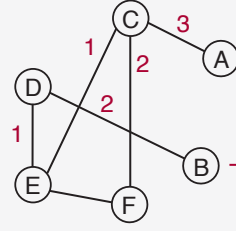
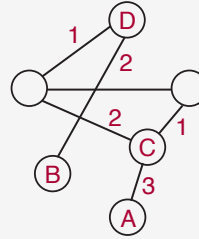


D ile bağlı değil


 $\Rightarrow a = B$
 $b = D$

Cevap: B

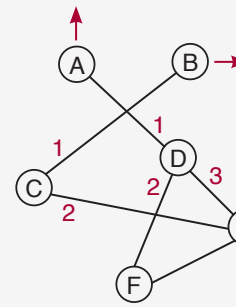
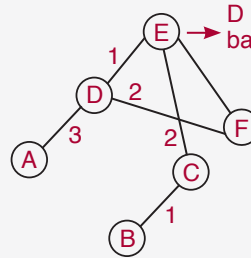
3.

A'nın bağlı olduğu
C, 3 iple bağlıB'nin bağlı olduğu
D, 2 iple bağlıO halde $x = D$, $y = C$

Cevap: C

Cevap: E

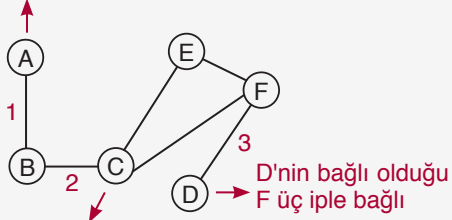
4.

A'nın bağlı olduğu
D, üç iple bağlıB'nin bağlı olduğu
C, iki iple bağlıD ve C'nin ikisinin de
bağlı olduğu ED ve C'nin ikisinin de
bağlı olduğu hücreO halde $x = E$, $y = A$

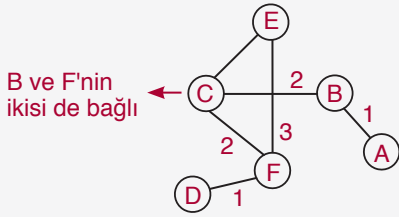
Cevap: D

TEST - 1 ÇÖZÜMLER

5. A'nın bağlı olduğu B, iki iple bağlı



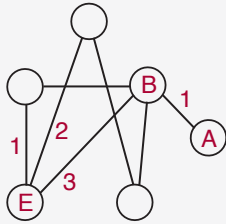
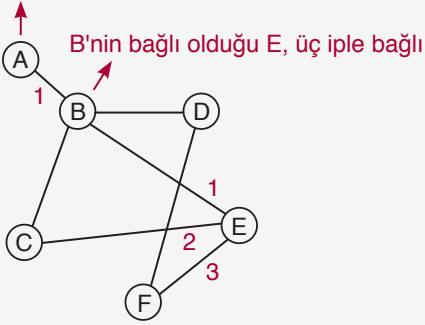
B ve F'nin ikisinin de bağlı olduğu C



O halde $x = E$, $y = F$

Cevap: A

6. A bir iple B'ye bağlı

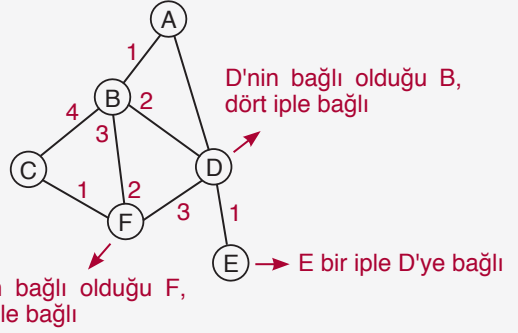


B'nin bağlı olduğu E, üç iple bağlı

O halde $x = A$, $y = E$

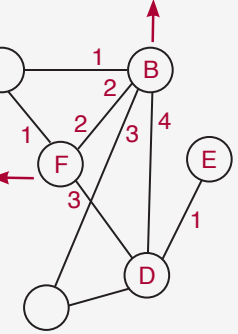
Cevap: D

- 7.



B'nin bağlı olduğu F, üç iple bağlı

D'nin bağlı olduğu B, dört iple bağlı



B'nin bağlı olduğu F, üç iple bağlı

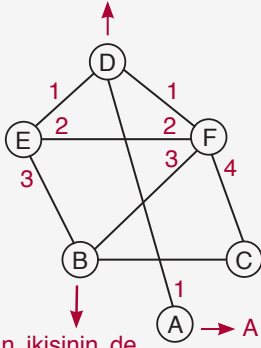
O halde $x = F$, $y = B$

Cevap: B

TEST - 1 ÇÖZÜMLER

8.

D'nin bağlı olduğu F dört iple bağlı;
E üç iple bağlı



E ile F'nin ikisinin de bağlı olduğu B

E ile F'nin ikisinin de bağlı olduğu B

D'nin bağlı olduğu F dört iple bağlı

A bir iple D'ye bağlı

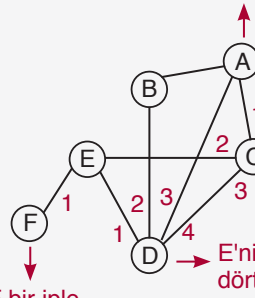
D'nin bağlı olduğu E üç iple bağlı

O halde $x = B$, $y = D$

Cevap: C

9.

C ve D'nin ikisinin de bağlı olduğu A



E'nin bağlı olduğu C üç iple bağlı

E'nin bağlı olduğu D dört iple bağlı

F bir iple E'ye bağlı

E'nin bağlı olduğu C üç iple bağlı

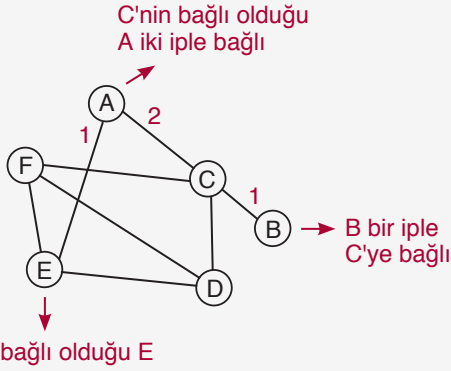
E'nin bağlı olduğu D dört iple bağlı

O halde $x = E$, $y = C$

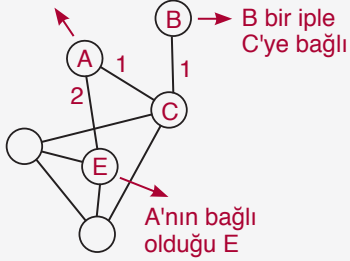
Cevap: E

TEST - 1 ÇÖZÜMLER

10.



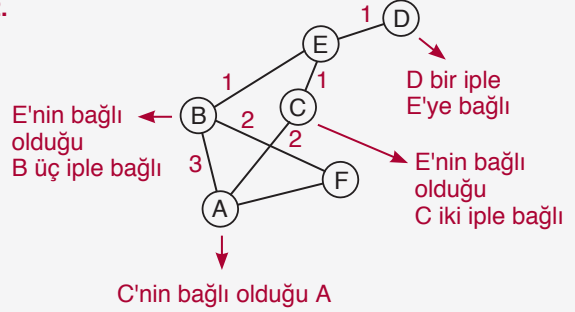
C'nin bağlı olduğu A iki iple bağlı

O halde $x = A$, $y = E$

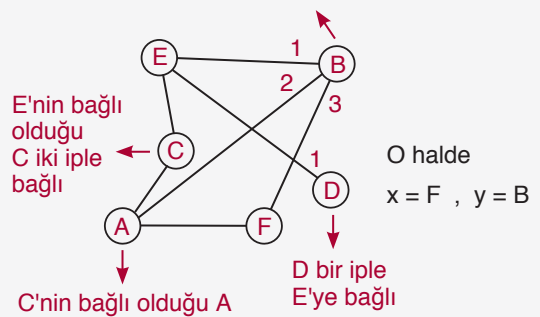
Cevap: B

TASARI EĞİTİM YAYINLARI

12.

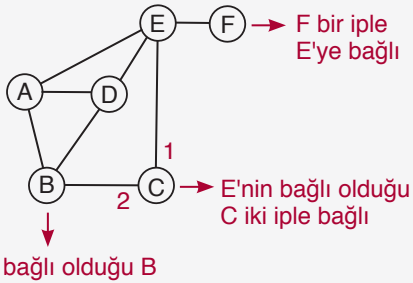


E'nin bağlı olduğu B üç iple bağlı

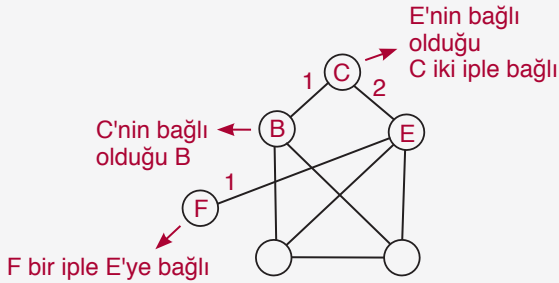


Cevap: A

11.



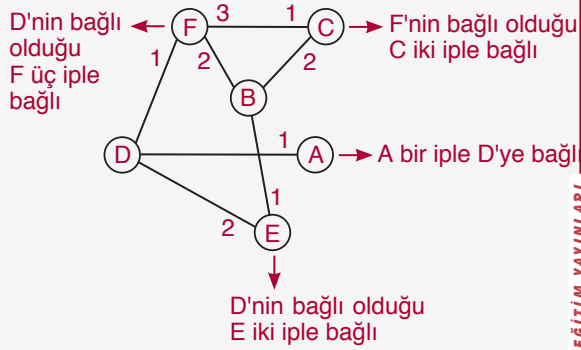
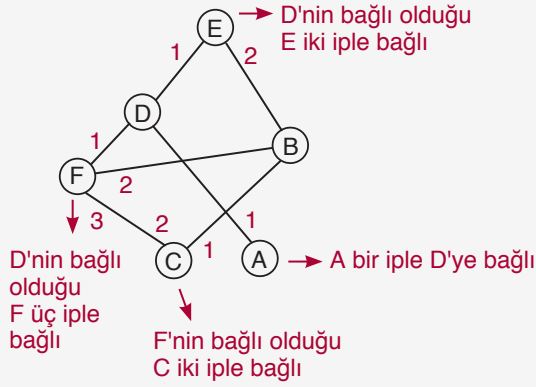
C'nin bağlı olduğu B

O halde $x = B$, $y = C$

Cevap: E

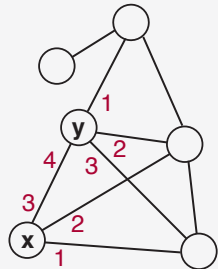
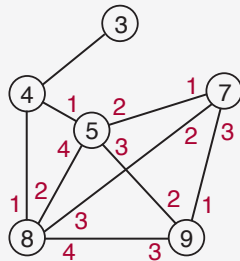
TEST - 2 ÇÖZÜMLER

1.

O halde $x = C$, $y = E$

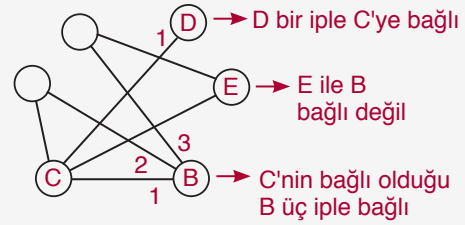
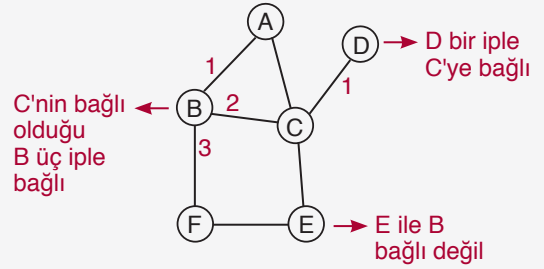
Cevap: B

2.

O halde $x = 7$, $y = 5$

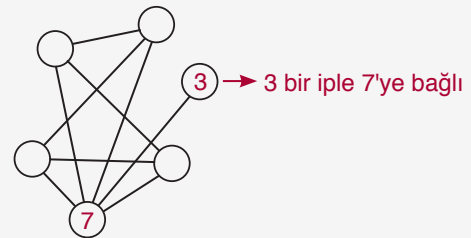
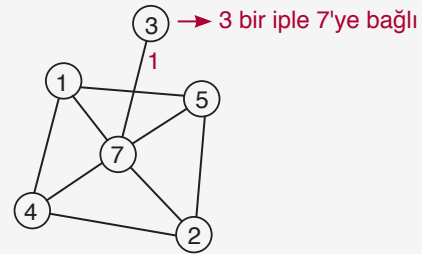
Cevap: C

3.

O halde $x = E$, $y = B$

Cevap: A

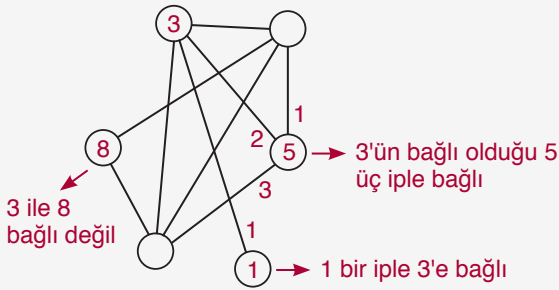
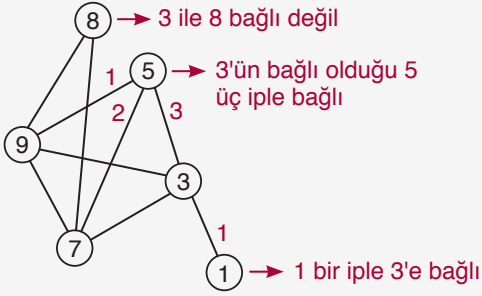
4.

O halde $x = 7$, $y = 1$

Cevap: A

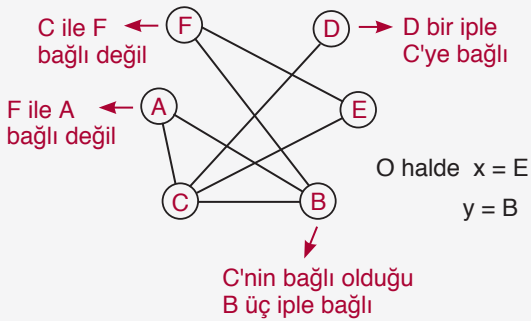
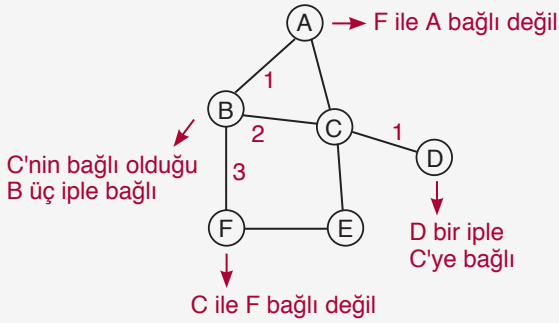
TEST - 2 ÇÖZÜMLER

5.

O halde $x = 8$, $y = 5$

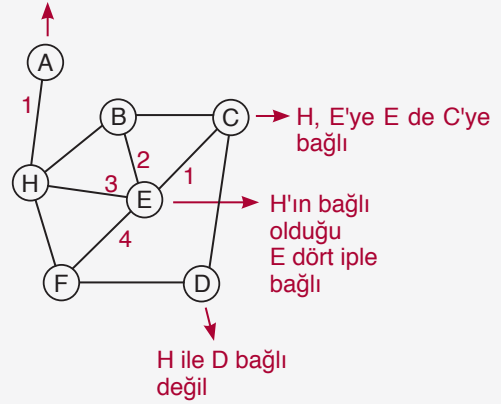
Cevap: C

6.

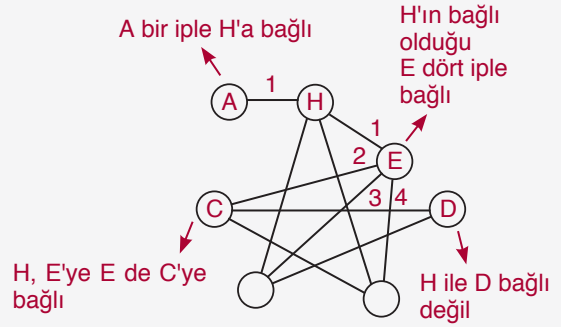


Cevap: B

7. A bir ipe H'a bağlı



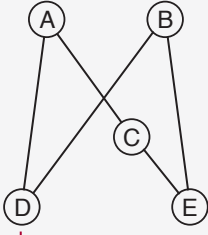
A bir ipe H'a bağlı

O halde $x = C$, $y = D$

Cevap: D

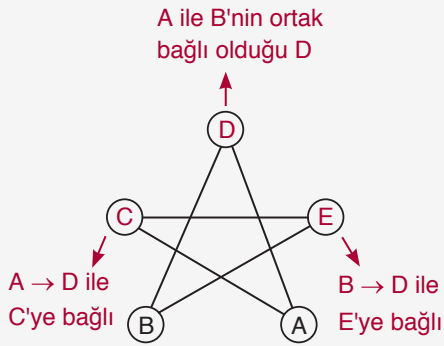
TEST - 2 ÇÖZÜMLER

8.



$A \rightarrow D$ ile C 'ye bağlı
 $B \rightarrow D$ ile E 'ye bağlı

A ile B'nin ortak
bağlı olduğu D

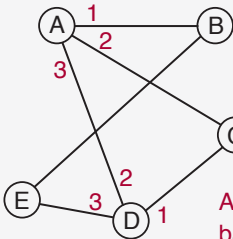


A ile B'nin ortak
bağlı olduğu D

$A \rightarrow D$ ile
 C 'ye bağlı $B \rightarrow D$ ile
 E 'ye bağlı

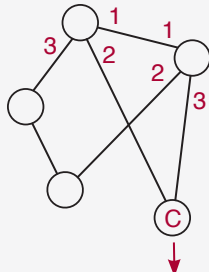
O halde $x = E$, $y = C$

9.



A ile D üçer ipele
bağlı

A ile D'nin ortak
bağlı olduğu C

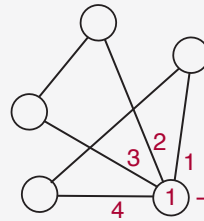
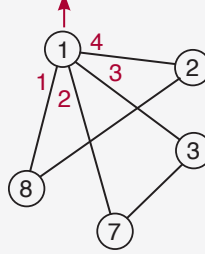


O halde $x = C$

A ile D'nin ortak
bağlı olduğu C

Cevap: C

10. 1 dört ipele bağlı

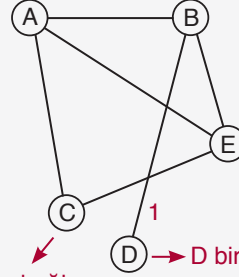


1 dört ipele bağlı

O halde $x = 1$

Cevap: E

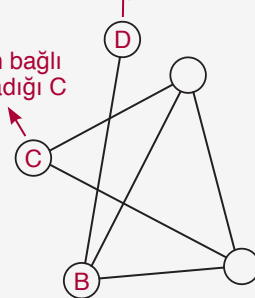
11.



B'nin bağlı
olmadığı C

D bir ipele B'ye bağlı

B'nin bağlı
olmadığı C

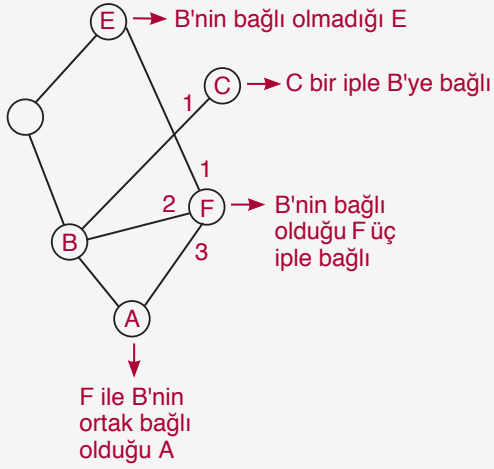
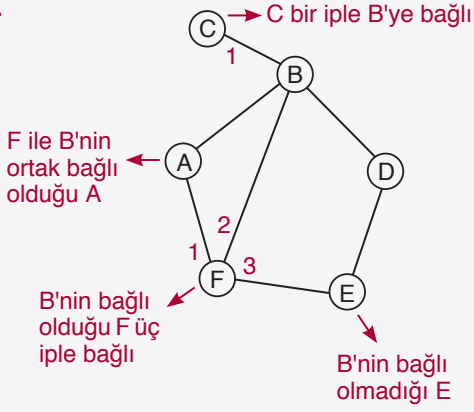


O halde $x = C$, $y = B$

Cevap: D

TEST - 2 ÇÖZÜMLER

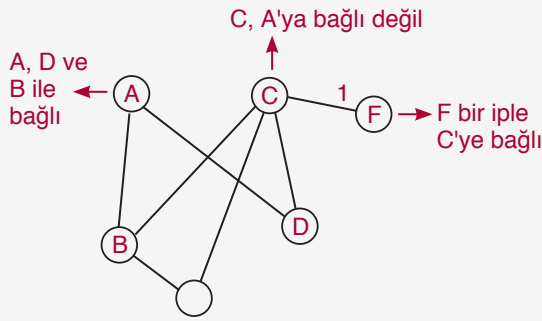
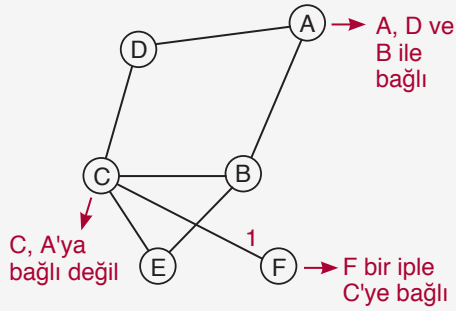
12.

O halde $x = E$, $y = A$

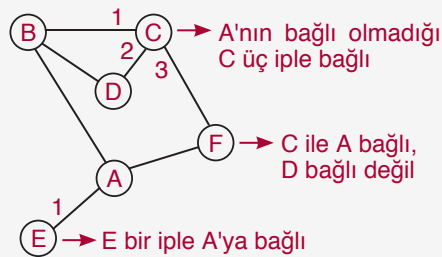
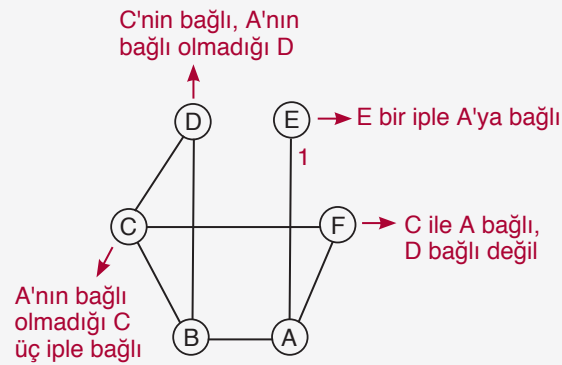
Cevap: A

TEST - 3 ÇÖZÜMLER

1.

O halde $x = D$, $y = B$

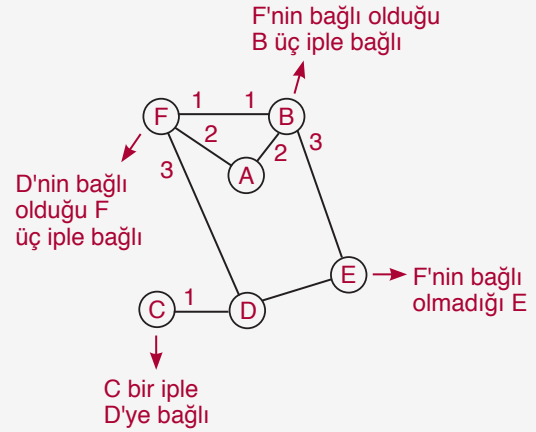
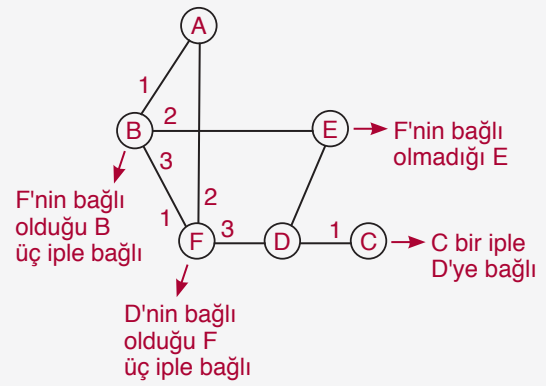
2.

O halde $x = D$, $y = F$

Cevap: B

Cevap: C

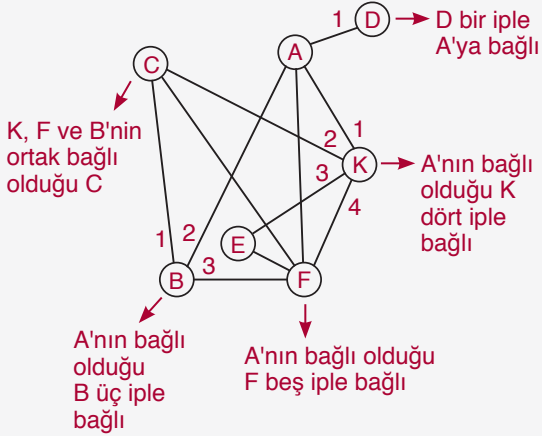
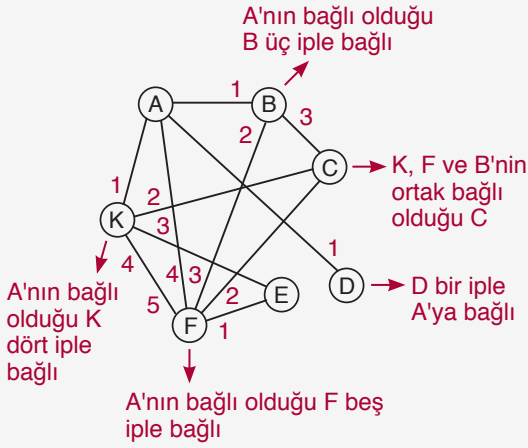
3.

O halde $x = E$, $y = A$

Cevap: D

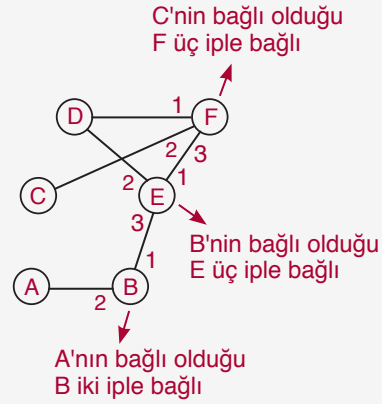
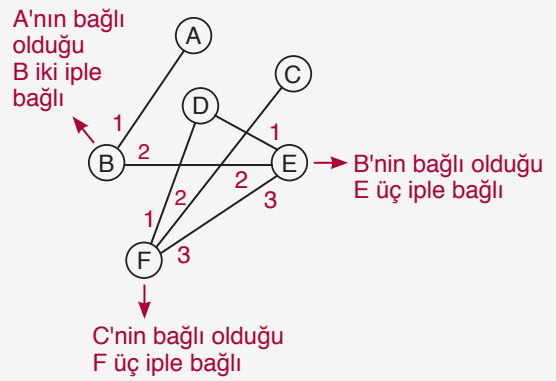
TEST - 3 ÇÖZÜMLER

4.

O halde $x = C$, $y = K$

Cevap: D

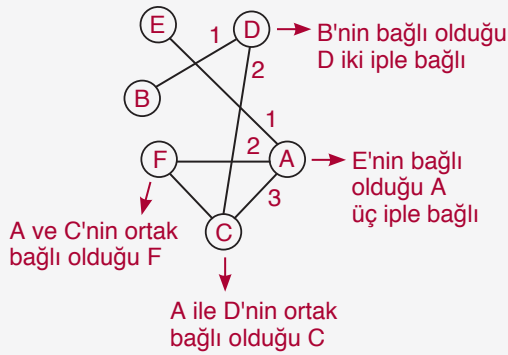
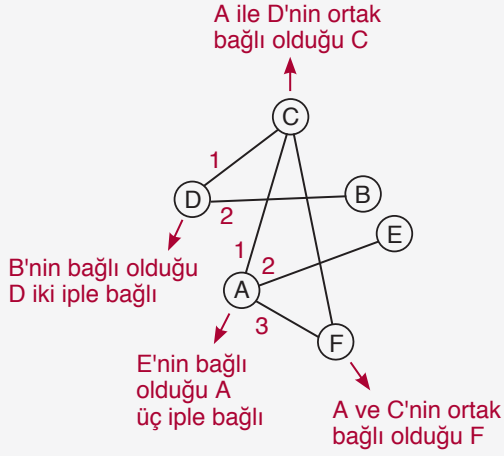
5.

O halde $x = E$, $y = F$

Cevap: B

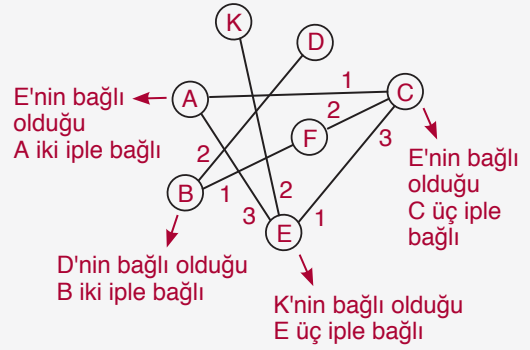
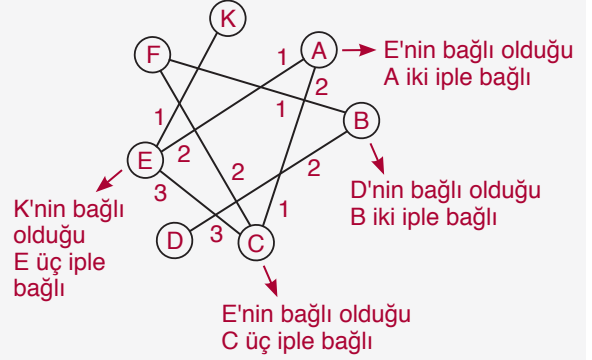
TEST - 3 ÇÖZÜMLER

6.

O halde $x = F$, $y = D$

Cevap: C

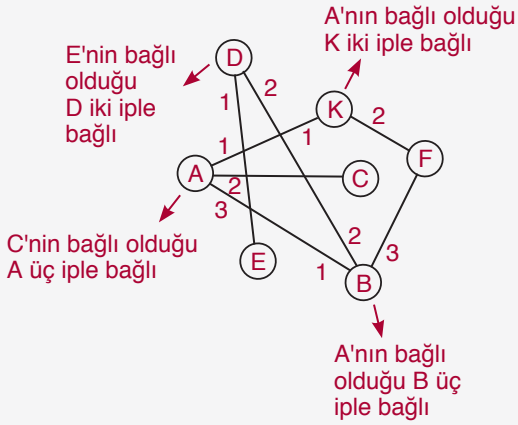
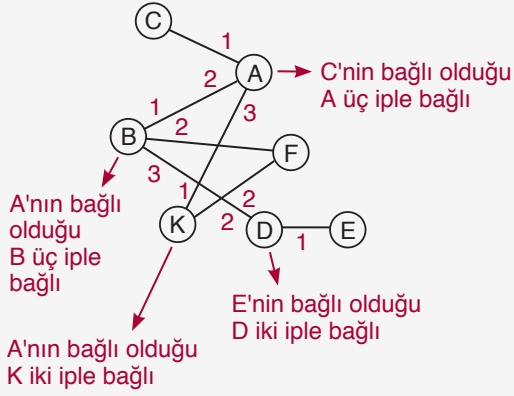
7.

O halde $x = F$, $y = E$

Cevap: E

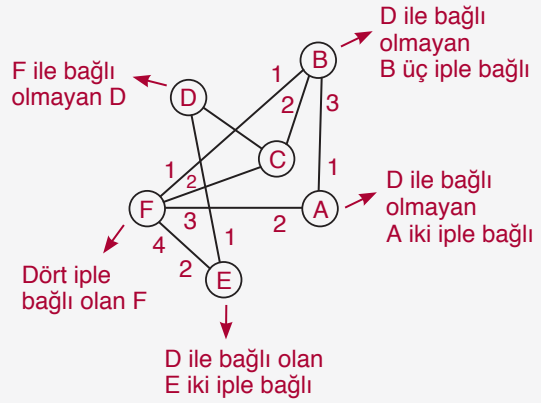
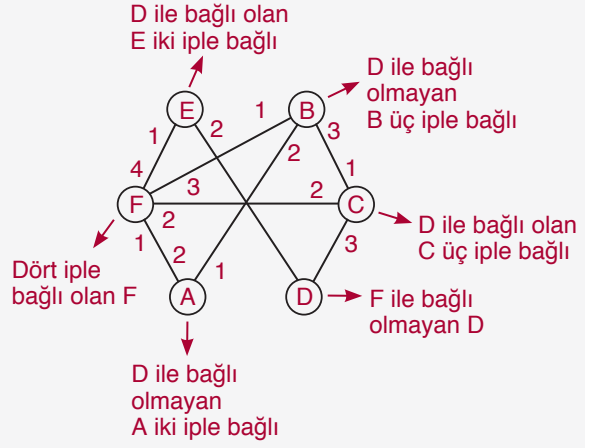
TEST - 3 ÇÖZÜMLER

8.

O halde $x = D$, $y = F$

Cevap: B

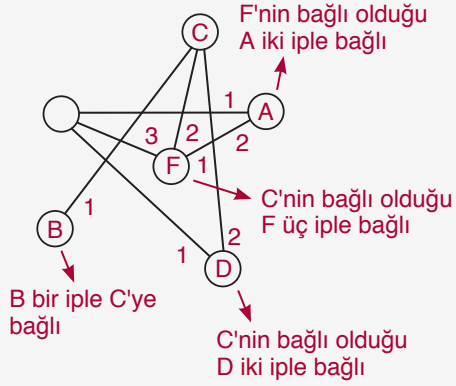
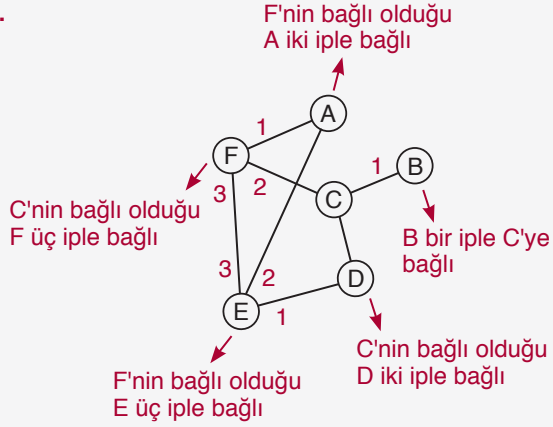
9.

O halde $x = A$, $y = D$

Cevap: D

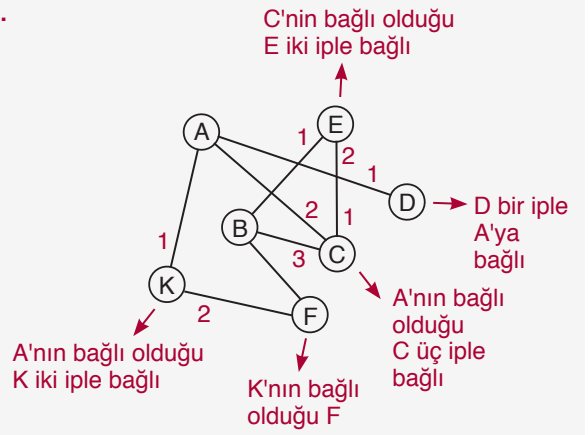
TEST - 3 ÇÖZÜMLER

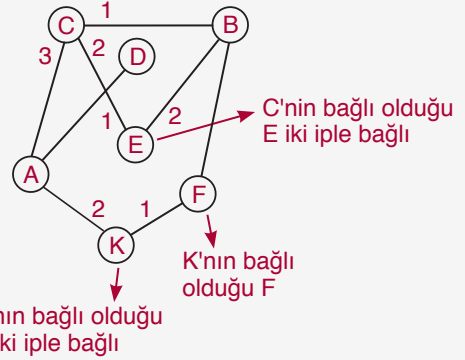
10.

O halde $x = A$, $y = D$

Cevap: E

11.

A'nın bağlı
olduğu
C üç iple
bağlı



C'nin bağlı olduğu
E iki iple bağlı

K'nın bağlı
olduğu F

A'nın bağlı olduğu
K iki iple bağlı

O halde $x = E$, $y = F$

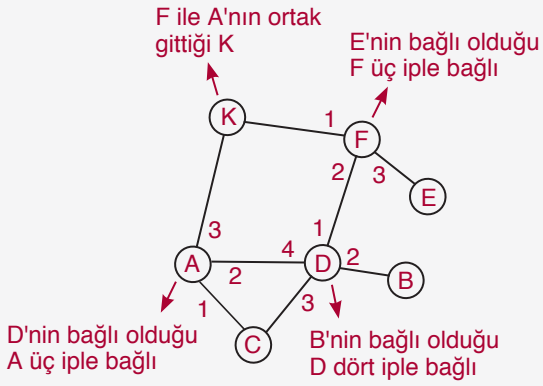
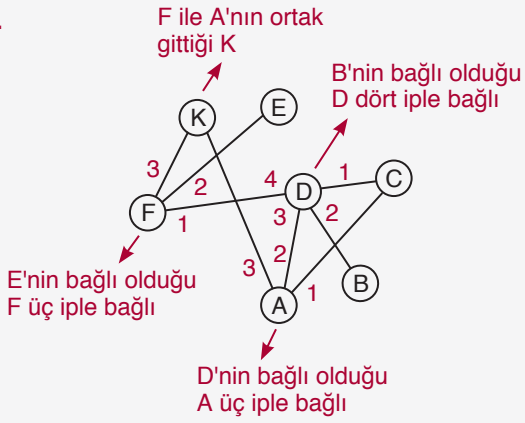
Cevap: A

TASARI EĞİTİM YAYINLARI

13

TEST - 3 ÇÖZÜMLER

12.

O halde $x = K$, $y = A$

Cevap: E